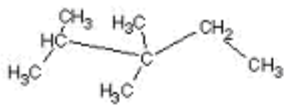
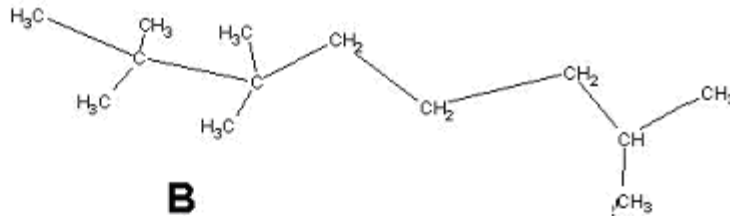


11017a Schriftliche Überprüfung der Hausaufgaben LK 11 2009

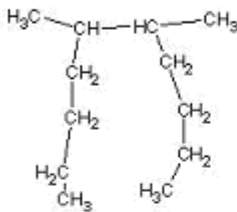
Aufgabe: Benenne die folgenden Moleküle mit ihrem systematischen Namen!



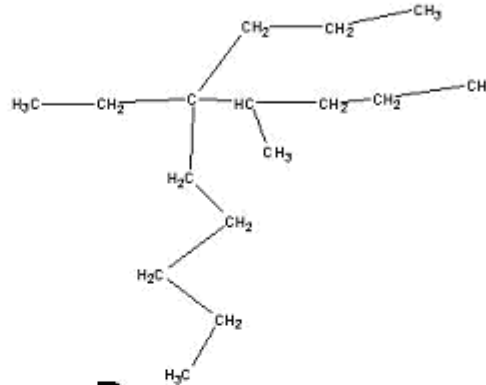
A



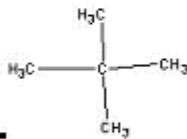
B



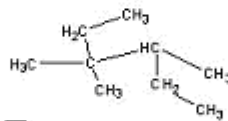
C



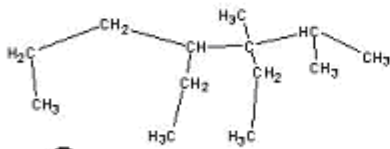
D



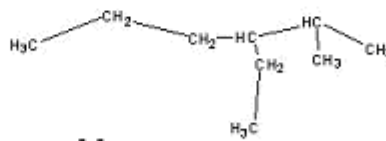
E



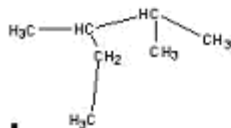
F



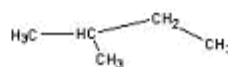
G



H

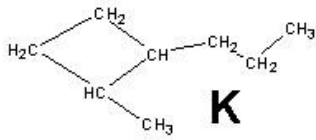


I

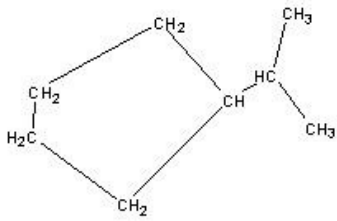
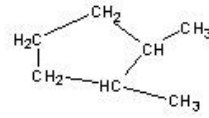


J

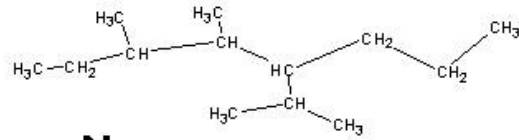
11017a Schriftliche Überprüfung der Hausaufgaben LK 11 2009



L

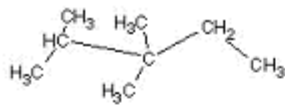


N

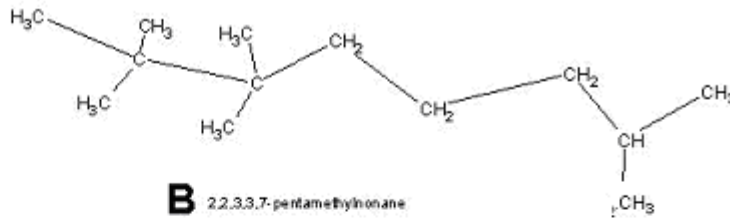


11017a Schriftliche Überprüfung der Hausaufgaben LK 11 2009

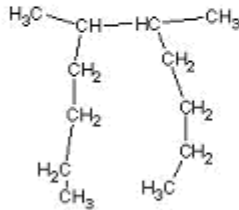
Lösung:



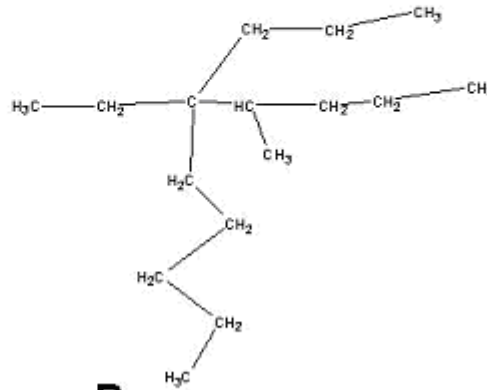
A 2,2,3-trimethylpentane



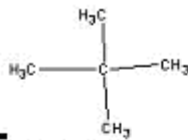
B 2,2,3,3,7-pentamethylnonane



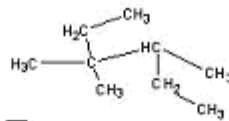
C 5,6-dimethyldecane



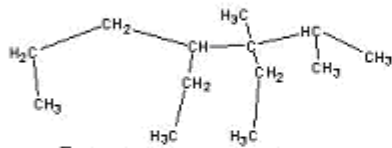
D 5-ethyl-4-methyl-6-propyldecane



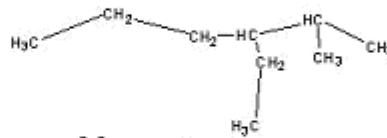
E 2,2-dimethylpropane



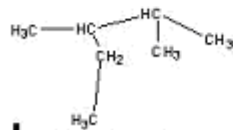
F 3,3,4-trimethylhexane



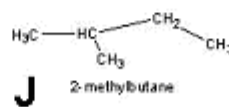
G 3,4-diethyl-2,3-dimethylheptane



H 3-ethyl-2-methylhexane



I 2,3-dimethylpentane



J 2-methylbutane

11017a Schriftliche Überprüfung der Hausaufgaben LK 11 2009

