

Lernkontrolle Nr. 1 (A)

Name: _____

Klasse: _____

Datum: _____

1.

$2 + 7 =$ _____

$12 + 7 =$ _____

$9 - 8 =$ _____

$17 - 6 =$ _____

$9 + 3 =$ _____

$14 + 3 =$ _____

$8 - 7 =$ _____

$19 - 6 =$ _____

$8 + 7 =$ _____

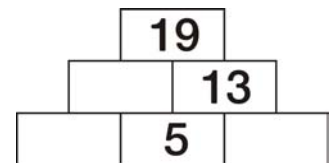
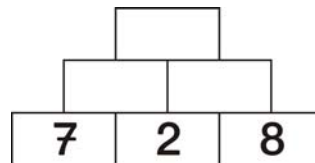
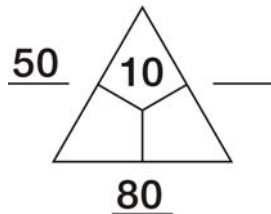
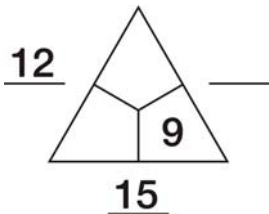
$13 + 9 =$ _____

$11 - 7 =$ _____

$18 - 12 =$ _____

12P

2.



12P

3. Wie viele Eier?




Z	E

Es sind _____ Eier.


2P

4. Zeichne in die Kästchen.

Z	E
1	5



Z	E
3	2



4P

5. Rechne aus.

$2Z + 3Z =$ _____

$4Z + 2Z =$ _____

$20 + 30 =$ _____

$40 + 20 =$ _____

$4Z + 5Z =$ _____

$3Z + 6Z =$ _____

$40 + \underline{\quad} = \underline{\quad}$

$\underline{\quad} + 60 = \underline{\quad}$

8P

*6. Rechne aus.

$40 + 50 =$ _____

$80 - 50 =$ _____

$10 + 60 =$ _____

$90 - 80 =$ _____

$50 + \underline{\quad} = \underline{70}$

$50 - \underline{\quad} = \underline{20}$

$\underline{\quad} + 50 = \underline{60}$

$\underline{\quad} - 70 = \underline{30}$


4P

*7. Rechne aus.

Herr Müller kauft auf dem Markt 70 Eier. Er gibt Frau Seider 30 Eier ab.

2P

Herr Müller hat noch _____ Eier.



44P

Du hast _____ Punkte erreicht!

Unterschrift

Lernkontrolle Nr. 1 (B)

Name: _____ Klasse: _____ Datum: _____

1.

$3 + 5 = \underline{\quad}$	$14 + 5 = \underline{\quad}$	$7 - 5 = \underline{\quad}$	$16 - 4 = \underline{\quad}$
$8 + 5 = \underline{\quad}$	$13 + 4 = \underline{\quad}$	$9 - 8 = \underline{\quad}$	$19 - 7 = \underline{\quad}$
$9 + 5 = \underline{\quad}$	$16 + 6 = \underline{\quad}$	$13 - 5 = \underline{\quad}$	$17 - 14 = \underline{\quad}$

12P

2.

$\underline{15}$ $\underline{12}$	$\underline{80}$ $\underline{60}$	 $5 \quad 6 \quad 1$	 $20 \quad 12 \quad 2$
--	--	-------------------------	---------------------------

12P

3. Wie viele Eier?

Z	E

Es sind Eier. 2P

4. Zeichne in die Kästchen.

<table border="1" style="border-collapse: collapse; text-align: center;"> <tr> <td style="width: 30px; height: 30px;">Z</td> <td style="width: 30px; height: 30px;">E</td> </tr> <tr> <td style="width: 30px; height: 30px;">2</td> <td style="width: 30px; height: 30px;">8</td> </tr> </table>	Z	E	2	8		<table border="1" style="border-collapse: collapse; text-align: center;"> <tr> <td style="width: 30px; height: 30px;">Z</td> <td style="width: 30px; height: 30px;">E</td> </tr> <tr> <td style="width: 30px; height: 30px;">5</td> <td style="width: 30px; height: 30px;">1</td> </tr> </table>	Z	E	5	1	
Z	E										
2	8										
Z	E										
5	1										

4P

5. Rechne aus.

*6. Rechne aus.

$3Z + 5Z = \underline{\quad}$	$6Z + 2Z = \underline{\quad}$	$60 + 30 = \underline{\quad}$	$90 - 50 = \underline{\quad}$
$30 + 50 = \underline{\quad}$	$60 + 20 = \underline{\quad}$	$20 + 50 = \underline{\quad}$	$80 - 60 = \underline{\quad}$
$5Z + 2Z = \underline{\quad}$	$2Z + 6Z = \underline{\quad}$	$40 + \underline{\quad} = \underline{70}$	$70 - \underline{\quad} = \underline{20}$
$50 + \underline{\quad} = \underline{\quad}$	$\underline{\quad} + 60 = \underline{\quad}$	$\underline{\quad} + 50 = \underline{80}$	$\underline{\quad} - 50 = \underline{50}$

8P 4P

*7. Rechne aus.

Herr Schneider kauft auf dem Markt 60 Eier. Er gibt Frau Raupe 20 Eier ab. 2P

Herr Schneider hat noch Eier.

44P

Du hast Punkte erreicht!

Unterschrift