

# Mathematikarbeit Nr. 6 B

Addition, Subtraktion, Multiplikation, Schriftliches Dividieren, Brüche, Ungleichungen

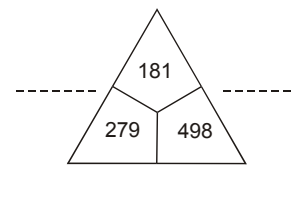
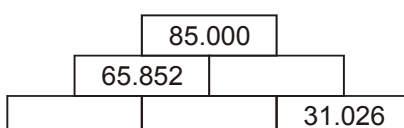
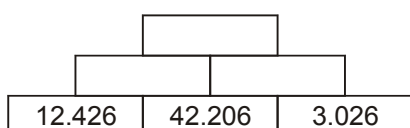
Name: \_\_\_\_\_ Klasse: \_\_\_\_\_ Datum: \_\_\_\_\_

1. Berechne die Aufgaben!

a) 
$$\begin{array}{r} 512354 \\ + 172383 \\ \hline \end{array}$$
    b) 
$$\begin{array}{r} 121555 \\ + 572622 \\ \hline \end{array}$$
    c) 
$$\begin{array}{r} 416722 \\ - 213544 \\ \hline \end{array}$$
    d) 
$$\begin{array}{r} 562390 \\ - 253266 \\ \hline \end{array}$$

6 P

2.

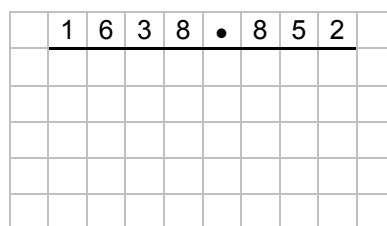
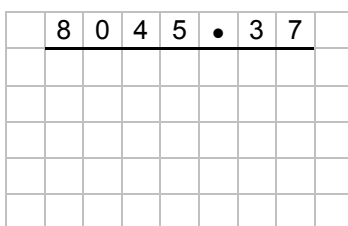
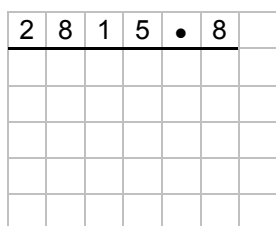


9 P

3.  $6 \cdot 4\,000 =$  \_\_\_\_\_  $4 \cdot 30\,000 =$  \_\_\_\_\_  $630 : 9 =$  \_\_\_\_\_  $350 : 5 =$  \_\_\_\_\_  
 $5 \cdot 7\,000 =$  \_\_\_\_\_  $30 \cdot 700 =$  \_\_\_\_\_  $6\,300 : 9 =$  \_\_\_\_\_  $35\,000 : 5 =$  \_\_\_\_\_

8 P

4. Löse die folgenden Aufgaben in den Kästchen.



6 P

5.  $2\,2525 : 5 =$  \_\_\_\_\_  $5\,1892 : 7 =$  \_\_\_\_\_

P

$8\,1480 : 30 =$  \_\_\_\_\_

9 P

