

Mathematikübungsarbeit

Name: _____

Klasse: _____

Datum: _____

1.

$5 + 4 = \underline{\quad}$

$5 + 5 = \underline{\quad}$

$6 + 5 = \underline{\quad}$

$7 + 6 = \underline{\quad}$

$7 + 7 = \underline{\quad}$

$6 + 2 = \underline{\quad}$

$7 + 2 = \underline{\quad}$

$6 + 3 = \underline{\quad}$

$7 + 4 = \underline{\quad}$

$7 + 5 = \underline{\quad}$

$11 + 5 = \underline{\quad}$

$10 + 5 = \underline{\quad}$

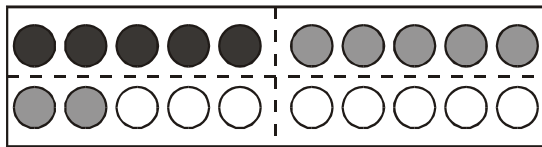
$11 + 4 = \underline{\quad}$

$9 + 6 = \underline{\quad}$

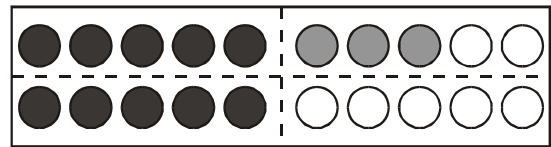
$12 + 6 = \underline{\quad}$

15P

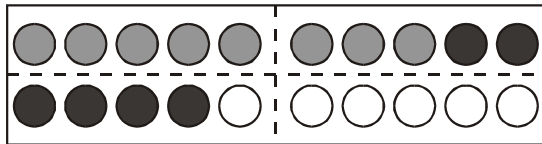
2.



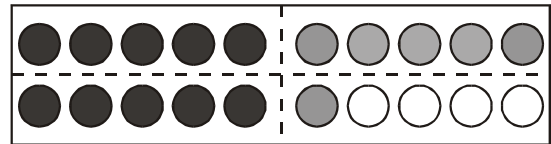
$\underline{\quad} + \underline{\quad} = \underline{\quad}$



$\underline{\quad} + \underline{\quad} = \underline{\quad}$



$\underline{\quad} + \underline{\quad} = \underline{\quad}$



$\underline{\quad} + \underline{\quad} = \underline{\quad}$

8P

3.

$15 + 3 = \underline{\quad}$

$3 + 15 = \underline{\quad}$

$1 + 4 = \underline{\quad}$

$4 + 1 = \underline{\quad}$

$6 + 4 = \underline{\quad}$

$4 + 6 = \underline{\quad}$

$9 + 8 = \underline{\quad}$

$8 + 9 = \underline{\quad}$

$7 + 1 = \underline{\quad}$

$1 + 7 = \underline{\quad}$

$17 + 5 = \underline{\quad}$

$5 + 17 = \underline{\quad}$

12P

Von 35 Punkten hast du _____ Punkte erreicht.

35P