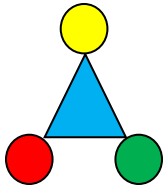
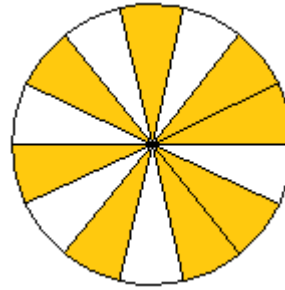
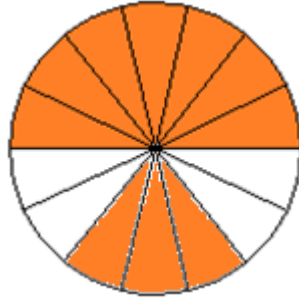
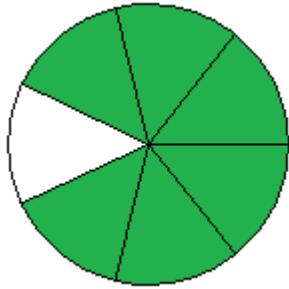


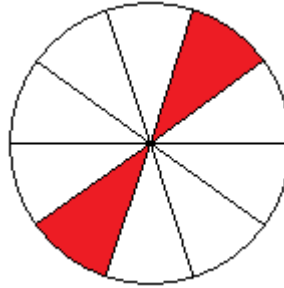
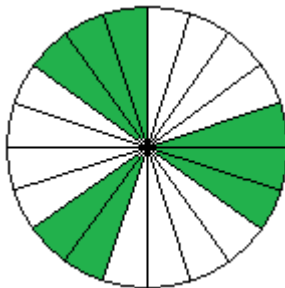
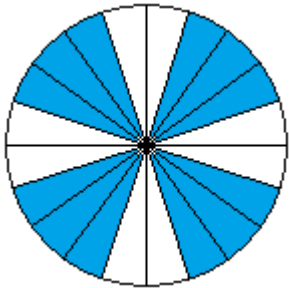
Klapptest - Bruchteile 4



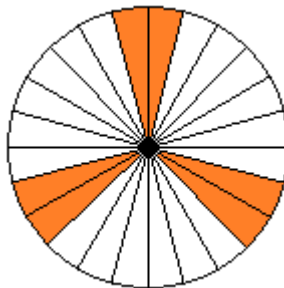
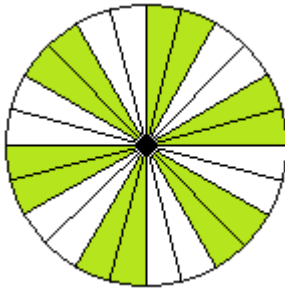
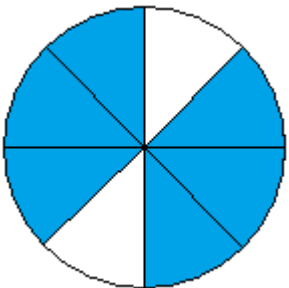
Falte das Blatt entlang der Linie. Welche Brüche werden dargestellt? Schreibe die Bruchzahlen auf die Linie..



$$\frac{5}{6} \quad \frac{10}{14} \quad \frac{8}{14}$$



$$\frac{12}{20} \quad \frac{8}{20} \quad \frac{2}{10}$$



$$\frac{6}{8} \quad \frac{12}{24} \quad \frac{6}{24}$$

Ergebnis:

 / 9 P: